



The Wilkie Way

Practice Workbook 19

Extra practice sheets to support:

Maths Aotearoa

Book 1b Unit 2



**Working with
Doubles**

Name _____

Class _____



Complete each double domino and write the addition sentence under each domino.

Practice Sheet 1

○	○
	○

$2 + 2 = 4$

○ ○	○ ○
○ ○	○ ○

○ ○	
○ ○	
○ ○	

○	
○	
○	

○ ○	
○ ○	

○ ○ ○	
○ ○ ○	
○ ○ ○	

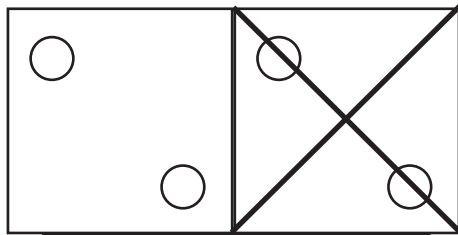
○ ○ ○	
○ ○	
○ ○ ○	

○ ○ ○	
○ ○ ○	




Write the subtraction sentence under each domino.

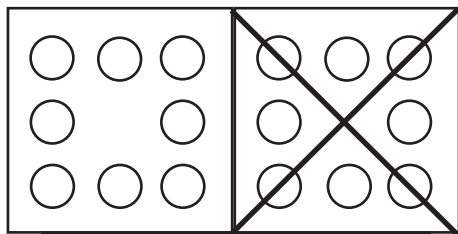
Practice Sheet 2



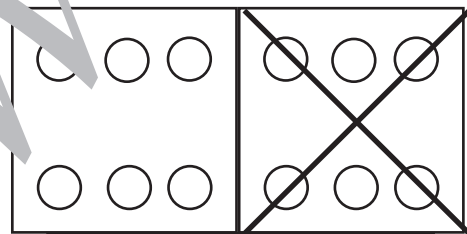
$4 - 2 = 2$



$6 - 4 = 2$



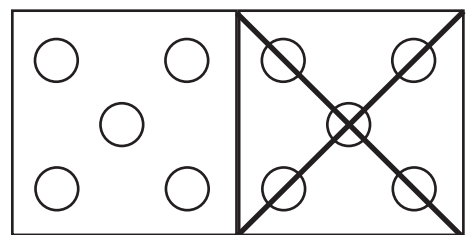
$9 - 6 = 3$



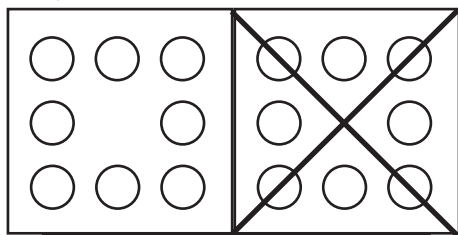
$6 - 9 = -3$



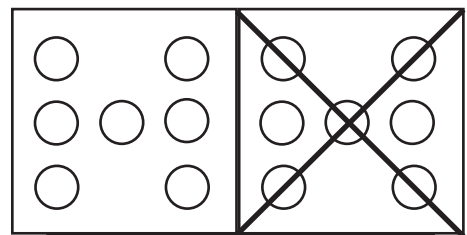
$3 - 2 = 1$



$5 - 4 = 1$



$9 - 6 = 3$




$6 - 9 = -3$



Colour half of each set and complete the number sentences.

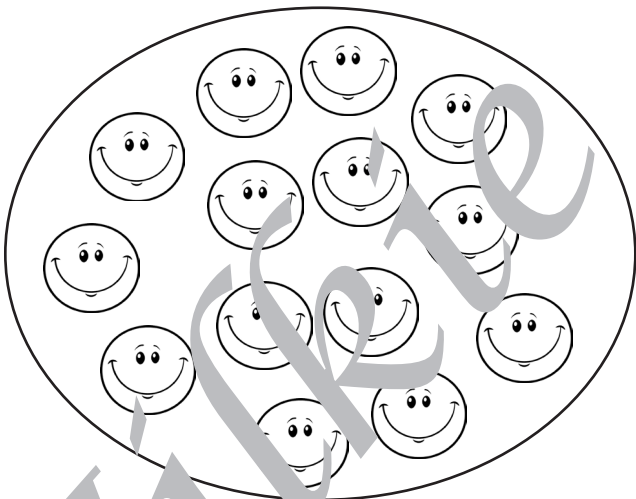
Practice Sheet 3



Half of 12 is

$6 + 6 =$


$12 - 6 =$



Half of 14 is

$7 + 7 =$

$14 - 7 =$



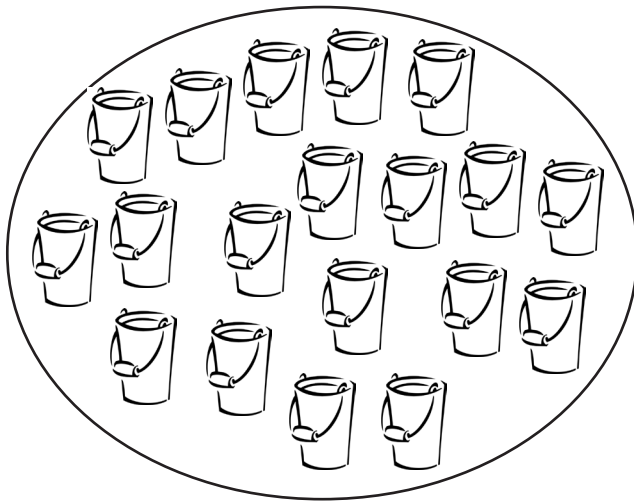
Half of 16 is

$8 + 8 =$

$16 - 8 =$



Colour half of each set and complete the number sentences.



Half of 18 is

$9 + 9 =$

$18 - 9 =$



Half of 20 is

$10 + 10 =$

$10 - 10 =$

$8 - 4 =$

$12 - 7 =$

$14 - 7 =$

$12 - 6 =$

$10 - 5 =$

$16 - 8 =$


$6 - 3 =$

$20 - 10 =$



Solve the story problems.

Emily had \$16. She spent \$8 on a new toy.
How much money does Emily have left?



There were 18 apples on the tree. Jenny picked half of them.
How many apples did she leave on the tree?




Kate spent \$6 on her lunch and she has \$6 left in her purse.
How much money did she have to start with?




Sally's book has twenty pages. She has read half her book.
How many more pages has she left to read?



There were 14 apples in the box. Half of them were red. The other half were green.
How many red apples in the box?



Ben scored 8 hoops. He scored half of the total.
How many hoops were shot altogether?





Solve the story problems.

Practice Sheet 6


Matthew scored double 7 on the dartboard.
What was his score?



Kerry scored 5 goals in both of her last two matches.
How many goals has she scored?



Sarah rolled a double 6.
How many moves can she make on the game board?




Peter had 10 marbles. He lost half his marbles to his friend.
How many marbles does Peter have left?



There were 18 biscuits in the packet. Jonathan ate half the packet.
How many biscuits did he eat?



There were 14 fish in the pond. Daniel put half the fish in his fish bowl.
How many fish are left in the pond?





Complete the number sentences.

Practice Sheet 7

How many do you 'just know the answer?'

$4 + 4 = \square$

$3 + 4 = \square$

$2 + 5 = \square$

$3 + 3 = \square$

$2 + 4 = \square$

$5 + 3 = \square$

$2 + 6 = \square$

$5 + 4 = \square$

$4 + 4 = \square$

$5 + 5 = \square$

$1 + 5 = \square$

$4 + 4 = \square$

$2 + 3 = \square$

$5 + 2 = \square$

$4 + 1 = \square$

$2 + 2 = \square$

$3 + 5 = \square$

$6 + 3 = \square$

